



Academy of Our Lady of Grace

400 Kamena Street, Fairview, NJ 07022
Telephone: 201-945-8300 Fax: 201-945-4580
Website: www.aolgfairview.org

K → 1

June 2025

Dear Parents,

Summer packets and supply lists are being sent home with your child today. The summer packets are required to be completed and returned to the teacher during the first week of school in September. (For Pre-K3 and Pre-K4 students, even though we are asking for them to choose 2 books to read, only one book report is required.)

For **returning students** going into grades 3 – 8 in September, 20% of your grade for the Math packet will be scored through the IXL summer requirement. Please refer to "IXL Summer Boost: Math" pinned to your child's IXL Dashboard. The Skill Plan can be found by clicking the "Learning" tab.

Items on the supply lists may be purchased by you or ordered through the School Tool Box Company (please see the attached flyer). When ordering, enter our school name or zip code to locate our school. Please allow ample time to be able to receive your order prior to the start of school.

Thank you.

Respectfully yours,

A handwritten signature in cursive script, appearing to read "Mrs. Filomena D'Amico".

Mrs. Filomena D'Amico



Grade 1 Supply List – September 2025

Dear Parents,

Welcome to First Grade! The following is a list of supplies your child will need for class. ***Please make sure to label all supplies with your child's name.*** Thank you.

- 2 packages of 12 Ticonderoga sharpened pencils
- 1 package of 3 erasers
- 2 packages of 8 glue sticks
- 1 pair of scissors
- 2 packs of crayons (24 count)
- 2 packages of markers
- 2 boxes of baby wipes
- 2 boxes of tissues
- 2 rolls of paper towels
- 2 packages of copy paper
- 3 plastic folders
- 1 package of extra-large Ziploc bags
- 1 composition notebook (primary, Grades K-2) journal with picture box
- 1 composition notebook (primary, Grades K-2) without a picture box
- 1 package black dry erase markers
- 1 large storage box (13-5/8L x 8-1/4W x 4-7/8H - 6 quart)
- 1 package of small (sandwich size) Ziploc baggies
- 1 package of multicolored construction paper
- 1 box of band-aides
- 2 school provided notebooks (must be purchased on the 1st day of school for \$5.00 – please send the money in an envelope in your child's backpack with their name, grade and label what the money is for.)

Order online **today!**

Dear parents,

We are happy to announce that we have chosen to sell prepackaged school supplies for the next school year through School Tool Box.

Want to avoid the back-to-school rush?

- Put your zip code in the box at **SchoolToolBox.com**
- Find the school, then choose your child's new grade

Each supply box matches your teacher's approved list. You can add extras or remove what you don't need. After you pay online, supplies are **shipped directly to your home address.**

It doesn't get easier than that!



SCHOOL TOOL BOX

schooltoolbox.com

800-952-1119

Your order supports



One Box, One Meal

School Name:

Academy of Our Lady of Grace
Fairview, NJ 07022

Ordering Available:

June 18th

Allow 10 days for processing.



Notes



Scan here to view your school's boxes and place your order today!



Academy of Our Lady of Grace Summer Reading 2024

Entering 1st Grade Book Choices	Entering 2nd Grade Book Choices
<i>Any book in a Series</i>	<i>Any book in a Series</i>
<u>Elephant and Piggie</u> by Mo Willems	<u>Henry and Mudge</u> by Cynthia Rylant
<u>Fly Guy</u> by Tedd Arnold	<u>Poppleton</u> by Cynthia Rylant
<u>Splat the Cat</u> by Rob Scotton	<u>Young Cam Jansen</u> by David A. Adler
<u>Pete the Cat</u> by James Dean	<u>Frog and Toad</u> by Arnold Lobel
<u>Biscuit</u> by Alyssa Satin Capucilli	<u>Fancy Nancy</u> by Jane O'Connor
<u>Noodles</u> by Hans Wilhelm	<u>Dixie Series</u> by Grace Gilman
<u>Yasmin</u> by Saadia Faruqi	Kevin Henkes books
<u>Pedro</u> by Fran Manushkin	<u>Ivy & Bean</u> by Annie Barrows
Jan Thomas books	<u>Keena Ford</u> by Melissa Thompson
<u>Mr. Putter & Tabby</u> by Cynthia Rylant	
Entering 3rd Grade Book Choices	Entering 4th Grade Book Choices
<i>Any book in a Series</i>	<i>Any book in a Series</i>
<u>Nate the Great</u> by Marjorie Weinman Sharmat	<u>My America</u> , a series of fictional diaries of children by various authors
<u>Cam Jansen</u> by David A. Adler	<u>Just Grace</u> by Charise Mericle Harper
<u>Bailey School Kids</u> by Marcia T. Jones and Debbie Dadey	<u>Who Was/Who Is</u> by multiple authors
Books by Patricia Reilly Giff	<u>My Weird School</u> series
<u>Judy Moody</u> by Megan McDonald	<u>The Mouse and the Motorcycle</u> by Beverly Cleary
<u>Secrets of Droon</u> by Tony Abbott	<u>Jake Drake Know It All</u> by Andrew Clements
<u>Geronimo Stilton</u> by Elisabetta Dami	<u>The World According to Humphrey</u> by Beth Birney
<u>My Weird School</u> by Dan Gutman	<u>Geronimo Stilton</u> series by Elisabetta Dami
<u>Galaxy Zack</u> by Ray O'Ryan	<u>Planet Omar</u> by Zanib Mian

Name _____

First Grade Book Report

Title: _____

Author: _____


How did you like the story? Color in the stars



Who are the characters in the story? _____


What is the setting of the story? _____

Draw an illustration from your favorite part of the story:





Write a caption that tells about your picture:

MY SUMMER



PRACTICE

PACKET



Summer



Name: _____

Number Word Match

Directions: Using the word bank, match the number word to the number of seeds in each watermelon.

one

two

three

four

five

six

seven

eight

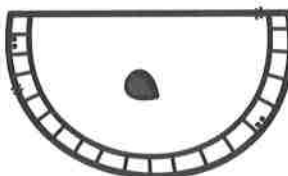
nine

ten

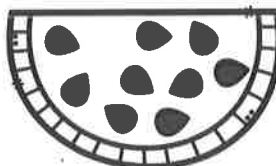


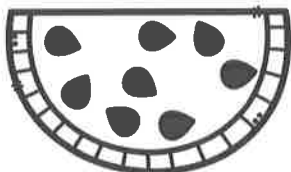


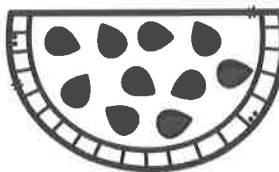
















Name: _____

Color by Teen Number

Directions: Using the key, match the color word to the teen number.

11 – red

12 – orange

13 – yellow


14 – green

15 – blue

16 – purple

17 – pink

18 – brown





Name: _____

Sunny Base 10

Directions: Write the number that matches the summer base 10 picture.

Tens Ones Total	Tens Ones Total	Tens Ones Total
Tens Ones Total	Tens Ones Total	Tens Ones Total
Tens Ones Total	Tens Ones Total	Tens Ones Total



Name: _____

Date: _____

Ten Frames

@learningcoreus on Instagram



3



5



10




6



2



4



Name: _____

Date: _____

Subtraction Word Problems

Noah had eight sailboats. He gave three to his brother. How many sailboats does Noah have now?

Sketch

Ten Frame

Number Line




Equation


Answer

Name: _____


Subtracting Fish




Directions: The fish are swimming away! **Cross out** ✕ the pictures to subtract. Then, write the answer.




$$8 - 2 = \underline{\quad}$$




$$3 - 1 = \underline{\quad}$$




$$5 - 2 = \underline{\quad}$$




$$4 - 4 = \underline{\quad}$$




$$10 - 5 = \underline{\quad}$$




$$7 - 3 = \underline{\quad}$$



$$6 - 5 = \underline{\quad}$$



$$2 - 0 = \underline{\quad}$$




$$9 - 2 = \underline{\quad}$$

Name: _____


Domino Doubles




Directions: Write and solve each doubles fact.




$$\underline{\quad} + \underline{\quad} = \underline{\quad}$$




$$\underline{\quad} + \underline{\quad} = \underline{\quad}$$




$$\underline{\quad} + \underline{\quad} = \underline{\quad}$$



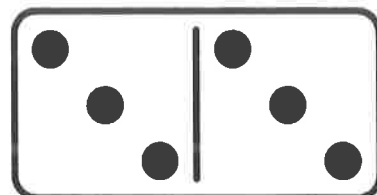
$$\underline{\quad} + \underline{\quad} = \underline{\quad}$$



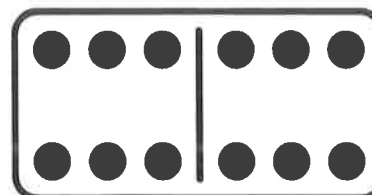
$$\underline{\quad} + \underline{\quad} = \underline{\quad}$$



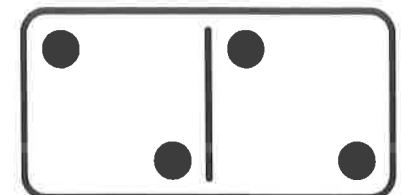
$$\underline{\quad} + \underline{\quad} = \underline{\quad}$$



$$\underline{\quad} + \underline{\quad} = \underline{\quad}$$



$$\underline{\quad} + \underline{\quad} = \underline{\quad}$$




$$\underline{\quad} + \underline{\quad} = \underline{\quad}$$


Name : _____



APPLES MISSING NUMBERS




Read the numbers, then write the missing ones.




Name: _____

Missing Numbers



Directions: Count up from 1 to 100. Fill in all the missing numbers in the number chart.

1	2				6	7		9	10
11	12	13				17		19	20
	22	23			26		28		30
31		33	34	35			38	39	
	42			45	46	47			50
51						57	58		60
	62	63			66	67			
71			74	75	76				80
81	82					87			90
91				95	96	97			100

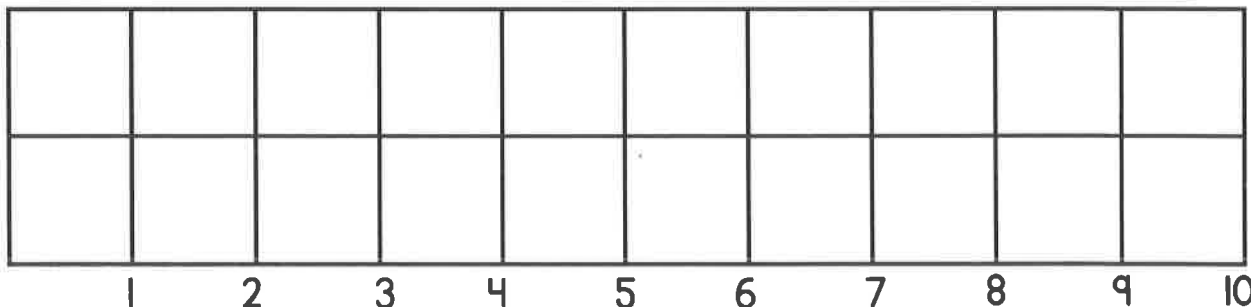



Name: _____

Date: _____

Graphing Summer Fruit


Directions: Count and color in the graph. Then, answer the questions below.



1. How many watermelons are there?



2. How many pineapples are there?



3. What is there the most of?




4. What is there the least of?




Name : _____



APPLES MISSING NUMBERS




Read the numbers, then write the missing ones.



Name : _____



APPLES MISSING NUMBERS



Read the numbers, then write the missing ones.

